




# Addition Fun

Find the missing number to make the addition correct!


1.  + 2 = 5 3 + 2 = 5

2.  + 3 = 4 1 + 3 = 4

3.  + 3 = 5 2 + 3 = 5

4.  + 3 = 5 2 + 3 = 5

5.  + 2 = 7 5 + 2 = 7

6.  + 5 = 7 2 + 5 = 7