


# Addition Fun




Find the missing number to make the addition correct!

1.    +   =  5

2.  +   =  4

3.   +   =  5

4.   +   =  5

5.      +   =  7

6.   +   =  7