




Addition Fun



Find the missing number to make the addition correct!

1.  +  _____ =  3

2.  +  _____ =  6

3.  +  _____ =  9

4.  +  _____ =  4

5.  +  _____ =  5

6.  +  _____ =  5