







Addition Fun

Find the missing number to make the addition correct!

1.  +   4

2.  +   6

3.  +   6

4.  +   4

5.  +   3

6.  +   7