



Addition Fun


Find the missing number to make the addition correct!

1.  $+ 3 = 6$ $3 + 3 = 6$

2.  $+ 3 = 5$ $2 + 3 = 5$

3.  $+ 1 = 6$ $5 + 1 = 6$

4.  $+ 4 = 6$ $2 + 4 = 6$

5.  $+ 4 = 5$ $1 + 4 = 5$

6.  $+ 3 = 6$ $3 + 3 = 6$