



Addition Fun


Find the missing number to make the addition correct!

1.  + 4 = 6 2 + 4 = 6

2.  + 3 = 4 1 + 3 = 4

3.  + 1 = 5 4 + 1 = 5

4.  + 3 = 6 3 + 3 = 6

5.  + 2 = 3 1 + 2 = 3

6.  + 3 = 8 5 + 3 = 8