







Addition Fun





Find the missing number to make the addition correct!

1.    +   =  7

2.    +   =  7

3.    +   =  4

4.    +   =  6

5.    +   =  4

6.      +   =  6