







# Addition Fun

Find the missing number to make the addition correct!

1.  +  \_\_\_\_\_ =  2

2.  +  \_\_\_\_\_ =  7

3.  +  \_\_\_\_\_ =  5

4.  +  \_\_\_\_\_ =  9

5.  +  \_\_\_\_\_ =  6

6.  +  \_\_\_\_\_ =  8