




Addition Fun

Find the missing number to make the addition correct!

1.  +  =  7

2.  +  =  7

3.  +  =  4

4.  +  =  9

5.  +  =  2

6.  +  =  4