




# Addition Fun


Find the missing number to make the addition correct!


1.  + 1 = 5 4 + 1 = 5

2.  + 4 = 6 2 + 4 = 6

3.  + 3 = 8 5 + 3 = 8

4.  + 1 = 3 2 + 1 = 3

5.  + 3 = 8 5 + 3 = 8

6.  + 4 = 8 4 + 4 = 8