




Addition Fun

Find the missing number to make the addition correct!

1.  +  _____  4

2.  +  _____  4

3.  +  _____  3

4.  +  _____  7

5.  +  _____  3

6.  +  _____  4