

Addition Fun




Find the missing number to make the addition correct!

1.     + = 5

2.  + = 4

3.   + = 6

4.    + = 4

5.    + = 4

6.   + = 6