



# Addition Fun


Find the missing number to make the addition correct!

1.  + 5 = 9 4 + 5 = 9

2.  + 3 = 5 2 + 3 = 5

3.  + 1 = 6 5 + 1 = 6

4.  + 1 = 5 4 + 1 = 5

5.  + 4 = 8 4 + 4 = 8

6.  + 5 = 9 4 + 5 = 9