




Addition Fun


Find the missing number to make the addition correct!

1.  +  ___ =  8

2.  +  ___ =  7

3.  +  ___ =  6

4.  +  ___ =  4

5.  +  ___ =  5

6.  +  ___ =  4