
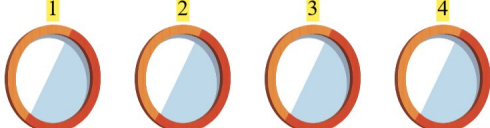



Addition Fun


Find the missing number to make the addition correct!

1.  $+$ 4 $=$ 5 $1 + 4 = 5$

2.  $+$ 2 $=$ 7 $5 + 2 = 7$

3.  $+$ 5 $=$ 9 $4 + 5 = 9$

4.  $+$ 1 $=$ 2 $1 + 1 = 2$

5.  $+$ 3 $=$ 5 $2 + 3 = 5$

6.  $+$ 5 $=$ 8 $3 + 5 = 8$