





# Addition Fun

Find the missing number to make the addition correct!

1.  <sup>1</sup>  <sup>2</sup> + 4 = 6 2 + 4 = 6

2.  <sup>1</sup>  <sup>2</sup>  <sup>3</sup> + 1 = 4 3 + 1 = 4

3.  <sup>1</sup>  <sup>2</sup>  <sup>3</sup>  <sup>4</sup>  <sup>5</sup> + 4 = 9 5 + 4 = 9

4.  <sup>1</sup>  <sup>2</sup> + 4 = 6 2 + 4 = 6

5.  <sup>1</sup>  <sup>2</sup>  <sup>3</sup>  <sup>4</sup> + 2 = 6 4 + 2 = 6

6.  <sup>1</sup>  <sup>2</sup>  <sup>3</sup> + 4 = 7 3 + 4 = 7