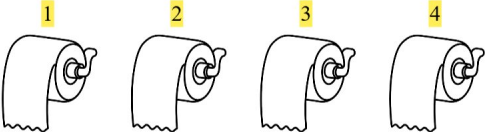



# Addition Fun


Find the missing number to make the addition correct!


1.  + 1 = 6 5 + 1 = 6

2.  + 4 = 8 4 + 4 = 8

3.  + 5 = 10 5 + 5 = 10

4.  + 3 = 8 5 + 3 = 8

5.  + 5 = 9 4 + 5 = 9

6.  + 2 = 3 1 + 2 = 3