

Addition Fun

Find the missing number to make the addition correct!





1.  +   =  7

2.  +   =  5

3.  +   =  8

4.  +   =  7

5.  +   =  7

6.  +   =  6