


# Addition Fun

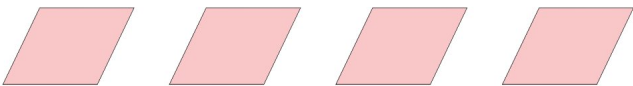


Find the missing number to make the addition correct!




1.  +  \_\_\_\_\_  7

2.  +  \_\_\_\_\_  5

3.  +  \_\_\_\_\_  8

4.  +  \_\_\_\_\_  2

5.  +  \_\_\_\_\_  7

6.  +  \_\_\_\_\_  9