


# Addition Fun


Find the missing number to make the addition correct!


1.   $+ 4 = 7$   $3 + 4 = 7$

2.   $+ 4 = 6$   $2 + 4 = 6$

3.   $+ 5 = 8$   $3 + 5 = 8$

4.   $+ 4 = 9$   $5 + 4 = 9$

5.   $+ 5 = 6$   $1 + 5 = 6$

6.   $+ 4 = 5$   $1 + 4 = 5$