







Addition Fun

Find the missing number to make the addition correct!

1.    +  _____ =  7

2.   +  _____ =  6

3.    +  _____ =  8

4.      +  _____ =  9

5.  +  _____ =  6

6.  +  _____ =  5