



Addition Fun


Find the missing number to make the addition correct!

1.  + 5 = 8 3 + 5 = 8

2.  + 3 = 7 4 + 3 = 7

3.  + 3 = 7 4 + 3 = 7

4.  + 3 = 7 4 + 3 = 7

5.  + 2 = 3 1 + 2 = 3

6.  + 2 = 6 4 + 2 = 6