




# Addition Fun

Find the missing number to make the addition correct!

1.  + 2 = 5 3 + 2 = 5

2.  + 2 = 4 2 + 2 = 4

3.  + 4 = 8 4 + 4 = 8

4.  + 3 = 4 1 + 3 = 4

5.  + 2 = 7 5 + 2 = 7

6.  + 2 = 6 4 + 2 = 6