





Addition Fun

Find the missing number to make the addition correct!

1.   + 1 = 3 2 + 1 = 3

2.      + 2 = 7 5 + 2 = 7

3.     + 1 = 5 4 + 1 = 5

4.   + 2 = 4 2 + 2 = 4

5.      + 5 = 10 5 + 5 = 10

6.      + 2 = 7 5 + 2 = 7