







# Addition Fun

Find the missing number to make the addition correct!


1. <sup>1</sup>  <sup>2</sup>  + 4 = 6 2 + 4 = 6

2. <sup>1</sup>  <sup>2</sup>  <sup>3</sup>  + 2 = 5 3 + 2 = 5

3. <sup>1</sup>  <sup>2</sup>  + 2 = 4 2 + 2 = 4

4. <sup>1</sup>  <sup>2</sup>  <sup>3</sup>  <sup>4</sup>  + 1 = 5 4 + 1 = 5

5. <sup>1</sup>  <sup>2</sup>  <sup>3</sup>  + 3 = 6 3 + 3 = 6

6. <sup>1</sup>  + 5 = 6 1 + 5 = 6