





# Addition Fun

Find the missing number to make the addition correct!

1.   + 2 = 4 2 + 2 = 4

2.     + 2 = 6 4 + 2 = 6

3.      + 2 = 7 5 + 2 = 7

4.     + 2 = 6 4 + 2 = 6

5.     + 3 = 7 4 + 3 = 7

6.     + 4 = 8 4 + 4 = 8