

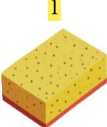
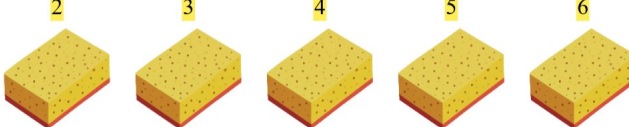


Addition Fun



Add the numbers and write your answers!

1.  +  $5 + 5 = 10$

2.  +  $1 + 4 = 5$

3.  +  $1 + 5 = 6$

4.  +  $4 + 4 = 8$

5.  +  $3 + 4 = 7$

6.  +  $2 + 3 = 5$