



Addition Fun

Count the images, add the number, and write your answer!


1.  + **3** $3 + 3 = 6$

2.  + **3** $5 + 3 = 8$

3.  + **2** $2 + 2 = 4$

4.  + **5** $5 + 5 = 10$

5.  + **5** $2 + 5 = 7$

6.  + **2** $5 + 2 = 7$