











Addition Fun

Count the images, add the number, and write your answer!

1.  $+$  $1 + 2 = 3$

2.   $+$  $2 + 1 = 3$

3.     $+$  $4 + 2 = 6$

4.    $+$  $3 + 1 = 4$

5.  $+$  $1 + 1 = 2$

6.  $+$  $1 + 3 = 4$