



Addition Fun


Count the images, add the number, and write your answer!


1.  + 1 $5 + 1 = 6$

2.  + 1 $5 + 1 = 6$

3.  + 5 $4 + 5 = 9$

4.  + 1 $5 + 1 = 6$

5.  + 1 $1 + 1 = 2$

6.  + 2 $3 + 2 = 5$