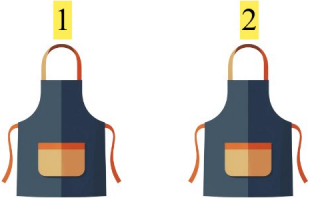


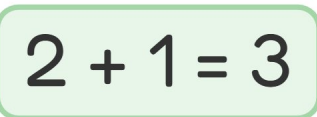




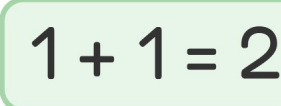
Addition Fun

Count the images, add the number, and write your answer!

1.     $2 + 1 = 3$

2.     $4 + 5 = 9$

3.     $5 + 2 = 7$

4.     $1 + 1 = 2$

5.     $2 + 4 = 6$

6.     $5 + 2 = 7$