


Addition Fun


Count the images, add the number, and write your answer!


1. ¹
 + **1** $1 + 1 = 2$

2. ¹
 + **4** $1 + 4 = 5$

3. ¹
 + **1** $1 + 1 = 2$

4. ¹ ² ³ ⁴
 + **3** $4 + 3 = 7$

5. ¹ ² ³ ⁴
 + **4** $4 + 4 = 8$

6. ¹ ² ³ ⁴ ⁵
 + **5** $5 + 5 = 10$