









Addition Fun


Count the images, add the number, and write your answer!

1.  + 5 = _____

2.  + 5 = _____

3.      + 4 = _____

4.    + 1 = _____

5.    + 4 = _____

6.    + 2 = _____