



Addition Fun

Count the images, add the number, and write your answer!


1.  + 5 5 + 5 = 10

2.  + 2 1 + 2 = 3

3.  + 2 3 + 2 = 5

4.  + 4 4 + 4 = 8

5.  + 4 1 + 4 = 5

6.  + 3 5 + 3 = 8