

Subtraction Fun




Find the missing number to complete the subtraction!

1.  -  ___ =  3

2.  -  ___ =  2

3.  -  ___ =  3

4.  -  ___ =  4

5.  -  ___ =  5

6.  -  ___ =  5